





Chapter I

Motion and Momentum

I – I What is Motion ?

- All matter in the universe is constantly in motion.
 - Electrons moving around the nucleus of an atom.
 - The particles in solid objects are still moving.

Changing Position

- Something is in motion if it is changing Position.
- When an object moves from one location to another, it is changing position.

Example :

- Runners sprint from the start line to the finish line.
- Their positions change, so they are in motion.



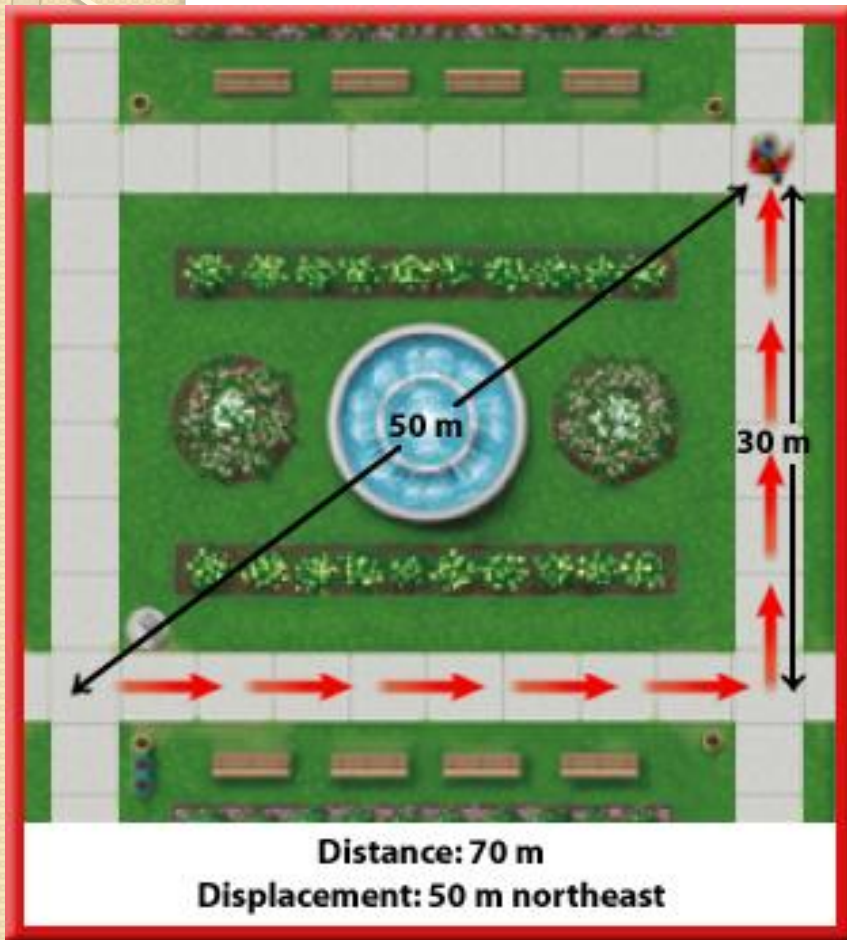
Relative Motion

- An object changes position if it moves relative to a Reference Point.

Example :

- Picture yourself competing in the 100m dash.
- You begin just behind the start line.
- When you finish, you are just past the start line.
 - The start line is the Reference Point.
 - Your position has changed 100m relative to the start line.
 - Motion has occurred.

Distance and Displacement



- Displacement Includes :
 1. The distance between the start and end points.
 2. The direction in which you travel.

Speed

- Speed – The distance traveled divided by the time taken to travel that distance.

$$\begin{array}{c} \frac{m}{s} \quad \frac{km}{h} \\ \text{Speed (in meters per second)} = \frac{\text{Distance (in meters)}}{\text{Time (in seconds)}} \end{array}$$
$$s = \frac{d}{t}$$

Average Speed

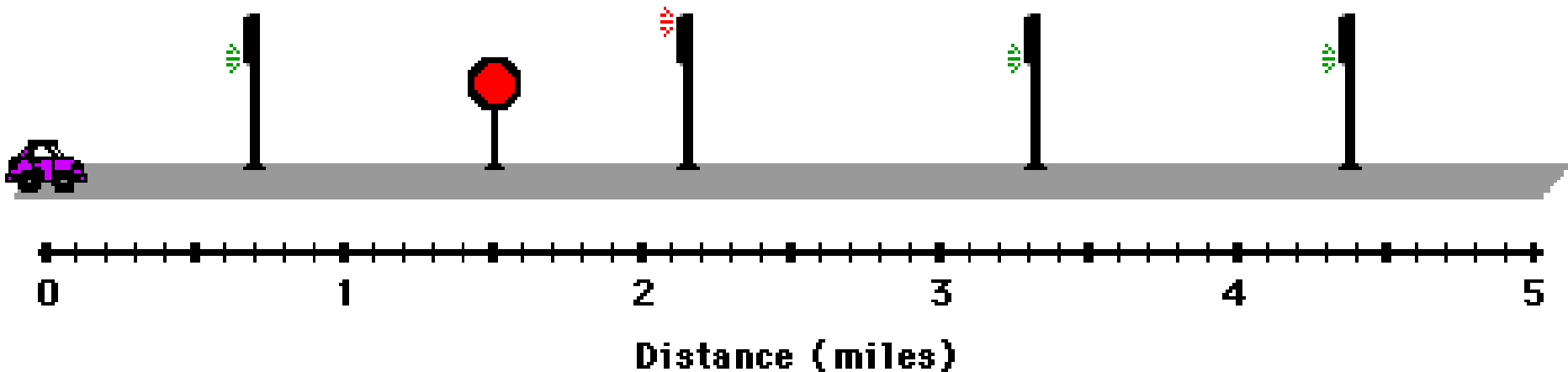
- Average Speed – The total distance traveled divided by the total time traveled.



- An object in motion can change speeds many times as it speeds up or slows down.


- Calculate the average speed.

Time: 0.00 hrs.



Example

- Calculate your average speed if it takes 0.5 hours to walk 2 km to the library.

- 
- Florence Griffith Joyner set a world record by running 200m in 21.34s. What was her average speed ?

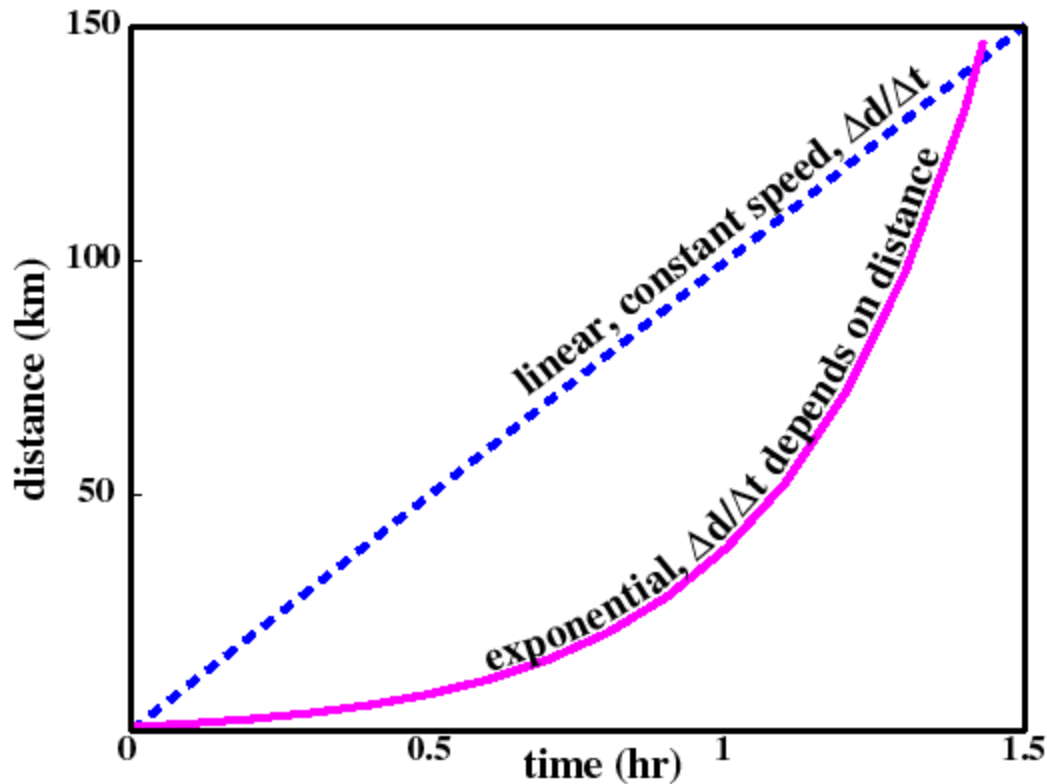
Instantaneous Speed

- Instantaneous Speed – The speed of an object at one instant of time.



Constant Speed

- Constant Speed – Speed that does not vary.



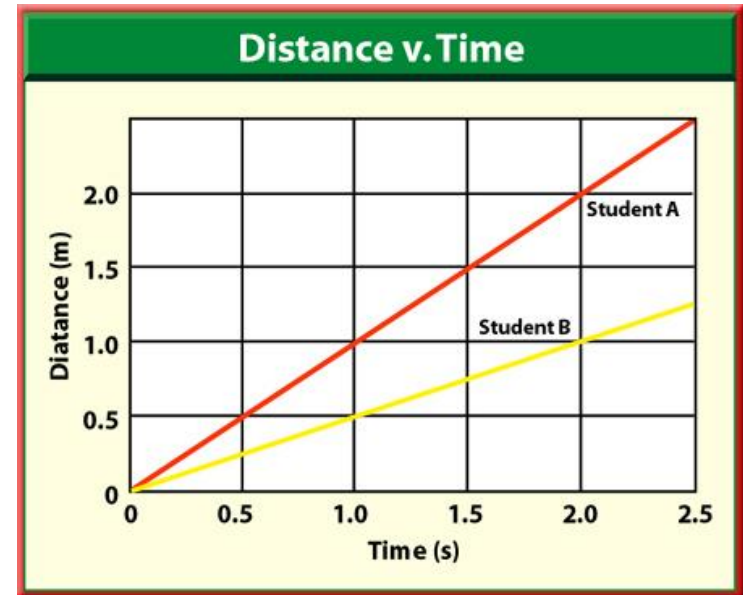
Graphing Motion

- You can represent the motion of an object with a distance-time graph.
- Time is plotted on the x-axis.
- Distance is plotted on the y-axis.



Distance-Time Graphs and Speed

- Which students traveled faster ?
- Steepness of the line shows us speed.
- What would a horizontal line represent ?



Velocity

- If you are hiking in the woods, you want to know not only your speed, but also the direction in which you are moving.
- Velocity includes :
 1. Speed of an object.
 2. Direction of its motion.

Changing Velocity

- Velocity can change if :
 1. The object's speed changes.
 2. The object's direction of motion changes.
 3. Both the speed and direction of motion change.

1 – 2 Acceleration

- Acceleration – The rate of change in velocity.
- Units : $\frac{m}{s^2}$ $\frac{km}{h^2}$
- 3 ways to accelerate :
 1. Change speed
 2. Change direction
 3. Change both speed and direction

Velocity and Acceleration

- Positive acceleration :
 - Velocity and acceleration are acting in the same direction.
 - You speed up.
- Negative acceleration :
 - Velocity and acceleration are acting in opposite directions.
 - You slow down

Calculating Acceleration

- Acceleration = Change in velocity divided by time.

$$a = \frac{\Delta s}{t} = \frac{s_f - s_i}{t}$$

Δ - “ delta ” means : change in

Things that affect acceleration

1. Change in velocity

2. Time interval

$$\frac{\Delta S}{t}$$

- A roller coaster starts down a hill going 10 m/s. Three seconds later it is going 32 m/s at the bottom of the hill. What is the acceleration of the roller coaster ?

- A car goes from 20 km/h to 70 km/h in 4 seconds. What is the acceleration of the car ?

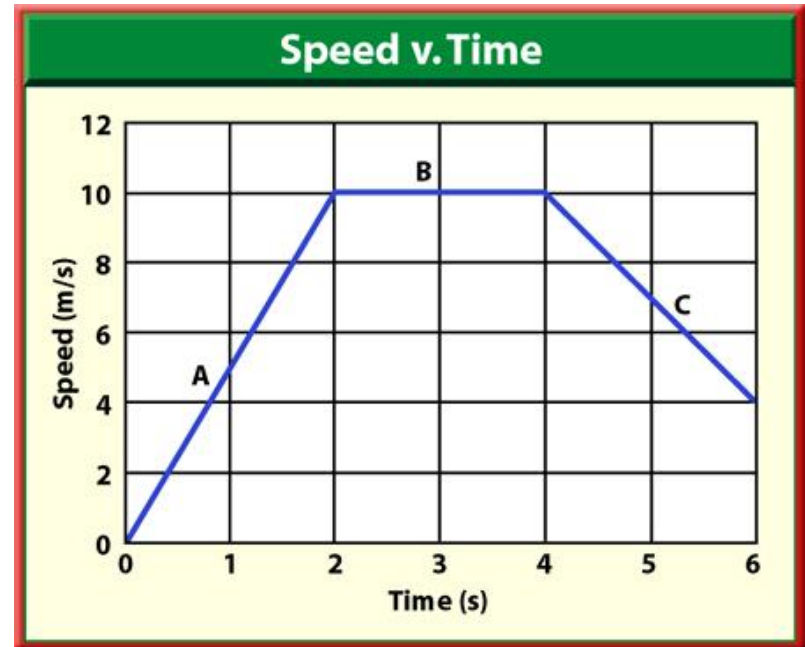
- A truck slows from 60 km/h to 0 km/h in 10 seconds. What is the acceleration of the truck ?


- Motion is not always along a straight line.
- If the acceleration is at an angle to the direction of motion, the object will turn.
- At the same time, it might speed up, slow down, or not change speed at all.



Graphing Accelerated Motion


- The motion of an object that is accelerating can be shown with a graph.
- For this type of graph, speed is plotted on the vertical axis and time on the horizontal axis.



- 
- An object that is speeding up will have a line on a speed-time graph that slopes upward.
 - An object that is slowing down will have a line on a speed-time graph that slopes downward.
 - A horizontal line on the speed-time graph represents an acceleration of zero or constant speed.

1 – 3 Momentum

- Mass – the amount of matter in an object
- Units : kg (kilogram)
- Mass is NOT weight.
 - Objects with more mass weigh more than objects with less mass.
 - However, the size of an object is not the same as the mass of the object.

- 
- The more mass an object has, the harder it is to start it moving, slow it down, speed it up, or turn it.
 - Inertia – The tendency of an object to resist a change in its motion.
 - Objects with more mass have more inertia.

Momentum

- Momentum – The measure of how hard it is to stop the object.

$$\text{Momentum} = \text{Mass} * \text{Velocity}$$

$$p = mv$$

- Momentum depends upon :
 1. The object's mass.
 2. The object's velocity.
- Momentum has a direction that is the same as the direction of the velocity.

Conservation of Momentum

- Law of Conservation of Momentum - The total momentum of objects that collide is the same before and after the collision.



Using Momentum Conservation

- There are many ways that collisions can occur.
- Sometimes, the objects that collide will bounce off of each other.
- In other collisions, objects will stick to each other after the collisions.
- In both of these types of collisions, the law of conservation of momentum enables the speeds of the objects after the collisions to be calculated.